

Grade 2

Name: \_\_\_\_\_

Date: \_\_\_\_\_

**Question: 1 of 35**

QID: 19280

Marks: 1

What is the next number in the pattern: 3, 6, 12, 24, \_\_\_\_?

- A. 48                       B. 25  
 C. 30                         D. 26

**Question: 2 of 35**

QID: 19288

Marks: 1

How many sides does a Hexagon have?

- A. 4                             B. 5  
 C. 6                             D. 7

**Question: 3 of 35**

QID: 19291

Marks: 1

Which month comes just before April?

- A. JUne                         B. February  
 C. March                       D. January

**Question: 4 of 35**

QID: 19293

Marks: 1

What is the product of 98765 and 0

- A. 98765                       B. 0  
 C. 98000                       D. 80000

Which of the following shapes is missing in the given figure?



- A. Triangle
- B. Diamond
- C. Rectangle
- D. Circle

## Question: 6 of 35

QID: 19273

Marks: 1

Which fruit is heavier ?



- A. Pineapple
- B. Pumpkin
- C. Both are same in weight
- D. Can't say

## Question: 7 of 35

QID: 19292

Marks: 1

Which option is in ascending order?

- A. 7871, 7882, 7874, 7889
- B. 7871, 7889, 7874, 7882
- C. 7882, 7871, 7889, 7874
- D. 7871, 7874, 7882, 7889

Dalton is helping his uncle in the garden this afternoon. The clock shows:



- A. 4:00 AM
- B. 4:30 PM

If you have a bag of apples that weighs 500 grams and a bag of oranges that weighs 250 grams, how much do they weigh together?

- A. 1000 grams
- B. 750 grams
- C. 150 grams
- D. 250 grams

Sara has 28 marbles, and she gives 13 marbles to her friend. How many marbles does Sara have left?

- A. 41
- B. 15
- C. 12
- D. 10

Sasha has 22 apples, she went apple picking and got 10 more. How many apples does Sasha have all together?

- A. 23
- B. 32
- C. 29
- D. 30

If it's 3:30 PM now, how many minutes are there until 4:00 PM?

- A. 20minutes
- B. 30minutes
- C. 35minutes
- D. 25minutes

**Question: 13 of 35**

QID: 19285

Marks: 1

1, 2, 4, 7, 11, \_\_\_\_\_, what number follows?

- A. 16                                       B. 15  
 C. 14                                       D. 13

**Question: 14 of 35**

QID: 19259

Marks: 1

If there are 5 bags, and each bag has 8 marbles, how many marbles are there in total?

- A. 35                                       B. 40  
 C. 45                                       D. 13

**Question: 15 of 35**

QID: 19281

Marks: 1

Which of the following shows the time in the evening?

- A. 3:00 PM                                       B. 3:00 AM  
 C. 6:00 PM                                       D. 6:00 AM

**Question: 16 of 35**

QID: 19278

Marks: 1

What is the sum of the first three natural numbers?

- A. 1     B. 6  
 C. 2     D. 3

**Question: 17 of 35**

QID: 19289

Marks: 1






What is the place value of 1 in 351?

- A. ones     B. tens  
 C. thousands                                       D. hundreds

What is the sum of 90 and zero?

- A. 90
- B. 0
- C. 900
- D. 9

Study the pictograph and find the total no of tomatoes and carrots present.


Tomato	
Capsicum	
Carrot	
Mushroom	
Potato	

- A. 4
- B. 10
- C. 24
- D. 6

What numbers are missing in this sequence: 5, 10, \_\_, 20, \_\_, 30?

- A. 15,20
- B. 20,25
- C. 15,25
- D. 25,35

What fraction of circle is green ?




- A.  $\frac{1}{4}$                        B.  $\frac{3}{4}$   
 C.  $\frac{2}{4}$                          D.  $\frac{4}{4}$

Which one of the following numbers has 5 tens 6 ones ?

- A. 65                               B. 66  
 C. 56                               D. 55

What is shown in this picture?




- A. Line                               B. Line Segment  
 C. Ray                                D. Shape

Arrange the numbers 25, 12, 33, 48, and 8 in ascending order

- A. 33, 48, 12, 25, 8               B. 8, 12, 25, 33, 48  
 C. 48, 33, 25, 12, 8               D. 25, 12, 8, 48, 33

Count the number of cups shown in the image .



- A. 10
- B. 9
- C. 8
- D. 7

There are 12 birds sitting on a tree branch. 6 more birds join them. How many birds are on the branch in total?

- A. 12
- B. 6
- C. 18
- D. 20

Colby made 11 crates of green juice. Each crate holds 9 bottles. How many bottles of green juice did Colby make?



- A. 20
- B. 99
- C. 2
- D. 81

Which shape has 4 sides and all sides of equal length?

- A. Square
- B. Rectangle
- C. Circle
- D. Pentagon

Who is taller?








- A. Boy
- B. Giraffe
- C. Both have same height
- D. Can't say

I have 4 vertices and 4 equal sides. What shape am I?

- A. Triangle
- B. Square
- C. Rectangle
- D. Circle



Ayush interviews his classmates and made a list on how each of them comes to school. Here is what he found. How many students come to school by bus?


Bus	
Cycle	
Car	
On foot	
Rickshaw	

 A. 7 B. 8 C. 9 D. 6

Which alphabet is in the middle of the given word SIGNATURE?

 A. A B. N C. T D. U

How many flowers are there in the given figure?



- A. 11
- C. 12

- B. 13
- D. 14

Question: 34 of 35

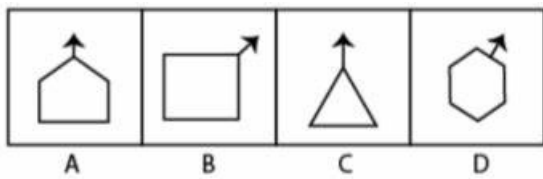
What is the next prime number after 13?

- A. 14
- C. 16

- B. 15
- D. 17

Question: 35 of 35

Find the odd one out



- A. A
- C. C

- B. B
- D. D

